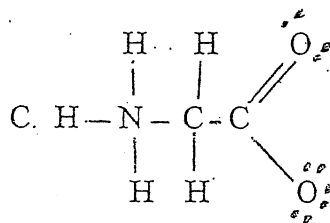
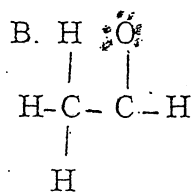
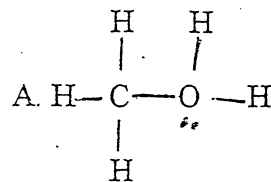


Which of the following structures contains atoms with a formal charge? Indicate the atom and the charge. Do any of the structures have a **net** (non-zero) charge?



(D) Describe the type of bonding that occurs in
$$\begin{array}{c} \text{H} \\ | \\ \text{H}-\text{C}-\text{O}-\text{H} \\ | \\ \text{H} \end{array}$$